



केन्द्रीय माध्यमिक शिक्षा बोर्ड, दिल्ली

Central Board of Secondary Education, Delhi

(परीक्षार्थी शरें To be filled in by the candidate)

(परीक्षार्थी प्रश्न-पत्र के ऊपर लिखे कोड को दराये गये बॉक्स में लिखें)
Candidate should write code no. as written on the top of the question paper in this box



30/2

अतिरिक्त उत्तर-पुस्तिका (ओं) की संख्या
No. of supplementary answer-book (s) used



परीक्षा का नाम Name of the examination AISSE - 2012

कक्षा Class X

विषय Subject Mathematics code - 041

परीक्षा का दिन एवं तिथि

Day & Date of the Examination Friday 2/3/12

उत्तर देने का माध्यम Medium of answering the paper English

किसी शारीरिक अक्षमता से प्रभावित हो तो सम्बन्धित

वर्ग में का निशान लगायें

B = दृष्टिहीन, D = मूक एवं बधिर, H = शारीरिक रूप से विकलांग, S = स्पास्टिक, C = डिस्लेक्सिक


If Physically challenged, tick the category

B = Blind, D = Deaf & Dumb, H = Physically Handicapped, S = Spastic, C = Dyslexic

क्या लेखन-लिपिक उपलब्ध करवाया गया हा / नहीं

Whether write provided Yes / No NO

B	D	H	S	C
---	---	---	---	---



Section-D

29.

Let AB be 60m high kg building
and EC be lighthouse of height 60+h m.
and distance b/w building & lighthouse be x m

In ΔABC

$$\tan 60^\circ = \frac{P}{B}$$

$$\sqrt{3} = \frac{60}{x} \Rightarrow x = \frac{60}{\sqrt{3}} \text{ or } \frac{60 \times \sqrt{3}}{\sqrt{3} \cdot \sqrt{3}} = \frac{60\sqrt{3}}{3} \Rightarrow 20\sqrt{3} \text{ (1)}$$

(1) % //

$$x = 20\sqrt{3} \text{ m.}$$

In ΔAED

$$\tan 30^\circ = \frac{h}{x}$$

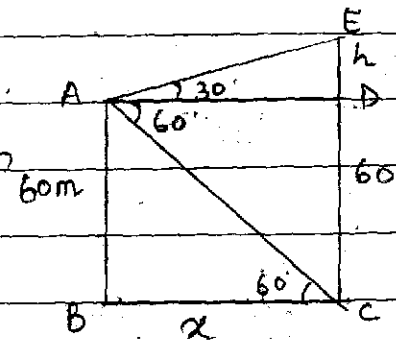
put value of x from (1)

$$\frac{1}{\sqrt{3}} = \frac{h}{20\sqrt{3}}$$

$$\Rightarrow 20\sqrt{3} = h\sqrt{3}$$

$$\Rightarrow h = \frac{20\sqrt{3}}{\sqrt{3}} \Rightarrow h = 20 \text{ m.}$$

$$\text{Height of lighthouse} = 60 + 20 = 80 \text{ m.}$$



4

(1) The difference b/w heights of lighthouse & building is $80 - 60 = 20\text{m}$.

(ii) The distance b/w lighthouse & building is $20\sqrt{3}\text{m}$.

30. H of tent = 8.25m .

H of cylinder = 5.5m

Radius of cylinder = $\frac{30}{2} = 15\text{m}$.

Height of cone = $8.25 - 5.5 = 2.75\text{m}$

Radius of cone = 15m .

Let length of canvas = $l\text{m}$

Breadth of canvas = 1.5m .

Area of canvas = CSA of cone + CSA of cylinder

$$\Rightarrow \pi r l + 2\pi r h$$

$$\Rightarrow \pi r (l + 2h)$$

$$\Rightarrow \pi \times 15 (15.25 + 2 \times 5.5)$$

$$\Rightarrow \pi \times 15 \times 26.25 \text{ cm}^2$$

⊙

QUESTION

$$L \times b = \pi \times 15 \times 26.25$$

$$L = \pi \times 15 \times 26.25$$

15

$$L = 262.5 \times \pi$$

375

$$L = \frac{262.5 \times 22}{7} \Rightarrow 8250$$

10

7

10

$$\Rightarrow 825m.$$

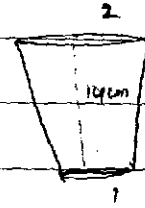
∴ length of canal = 825m

6

31.

H of frustum of cone = 14 cm.

Upper radius (R) = $\frac{4}{2} = 2$ cm.



Lower radius (r) = $\frac{2}{2} = 1$ cm.

Volume of frustum of cone = $\frac{\pi h}{3} (R^2 + r^2 + Rr)$

$$\frac{22 \times 14}{7 \times 3} ((2)^2 + (1)^2 + (2 \times 1))$$

$$\Rightarrow \frac{22 \times 2}{3} (4 + 1 + 2)$$

$$\Rightarrow \frac{22 \times 2}{3} \times 7 \Rightarrow \frac{44 \times 7}{3}$$

$$\Rightarrow \frac{308}{3} \Rightarrow 102.66 \text{ cm}^3$$

$$\therefore \text{Capacity of glass} = 102.66 \text{ cm}^3$$

32(11)

Let speed of aircraft be x km/h.

Distance = 2800.

when speed is $(x - 100)$ km/h. Time is increased by $\frac{30}{60}$ hr.

$$= \frac{1}{2} \text{ hr.}$$

$$\text{Time} = \frac{\text{Dis.}}{\text{Speed}}$$

ATQ.

$$\frac{2800}{x-100} - \frac{2800}{x} = \frac{1}{2}$$

$$\Rightarrow \frac{2800x - 2800(x-100)}{(x-100)(x)} = \frac{1}{2}$$

$$\Rightarrow \frac{2800x - 2800x + 280000}{x^2 - 100x} = \frac{1}{2}$$

$$x^2 - 100x = 420000 \quad 560000$$

$$x^2 - 100x - 560000 = 0$$

$$x^2 - 800x + 700x - 560000 = 0$$

$$x(x-800) + 700(x-800) = 0$$

$$(x+700)(x-800) = 0$$

if $x+700 = 0 \Rightarrow x = -700$ X (speed can't be negative)

$$\text{if } x - 800 = 0$$

$$x = 800$$

∴ Speed of aircraft is 800 km/h.

original duration $\Rightarrow \frac{\text{Distance}}{\text{speed}}$

$$= \frac{2800}{800} \Rightarrow \frac{7}{2} \Rightarrow 3 \frac{1}{2}$$

$$\Rightarrow 3 \text{ hr. } 30 \text{ min} \quad \underline{\text{Ans}}$$

33.

$$S_7 = 119$$

$$S_{17} = 714$$

$$S_n = ? \quad S_n = \frac{n}{2} (2a + (n-1)d)$$

$$S_7 = \frac{7}{2} (2a + (7-1)d)$$

$$\Rightarrow 119 = \frac{7}{2} (2a + 6d)$$

$$\Rightarrow 17 = \frac{1 \times 2}{2} (a + 3d) \Rightarrow a + 3d = 17 \quad \text{--- (1)}$$

QUESTION

$$S_{17} = \frac{17(2a + (17-1)d)}{2}$$

$$42 = \frac{17(2a + 16d)}{2}$$

$$\Rightarrow 42 = \frac{1}{2} \times 2 (a + 8d)$$

$$\Rightarrow a + 8d = 42 \quad \text{--- (i)}$$

Solving (i) & (ii)

$$a + 8d = 42$$

$$a + 3d = 17$$

$$5d = 25$$

$$d = 5 \quad \text{put in (i)}$$

$$a + 3 \times 5 = 17$$

$$a = 17 - 15 = 2$$

$$a = 2 \quad \text{and} \quad d = 5$$

$$S_n = \frac{n}{2} (2a + (n-1)d)$$

$$\Rightarrow S_n = \frac{n}{2} (2 \times 2 + (n-1)5)$$

$$\Rightarrow S_n = \frac{n}{2} (4 + 5n - 5)$$

$$\Rightarrow S_n = \frac{n}{2} (5n - 1)$$

$$\Rightarrow S_n = \frac{5n^2 - n}{2}$$

Sum of first n terms = $\frac{5n^2 - n}{2}$ Ans.

34 Given \Rightarrow AB is tangent to circle at point P.

To prove \Rightarrow $OP \perp AB$

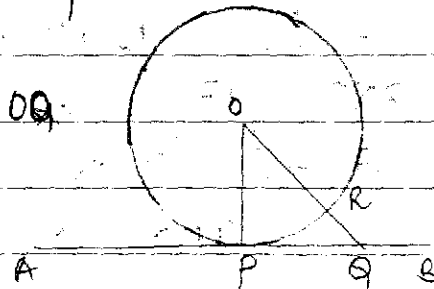
Cons \Rightarrow Take a point Q on AB and join OQ.

Proof \Rightarrow OP is radius

OQ lies outside circle

\therefore and intersect circle at R.

$OR < OQ$



But $OP = OR$ (radius of circle)
 $\therefore OP < OR$

Thus, OP is shorter than any other point Q on AB join too.
 $\therefore OP$ is shortest distance b/w O and AB

But ^{we know} the shortest distance b/w a line & point is perpendicular distance.

$\therefore OP \perp AB$

(Hence Proved)

Section-c

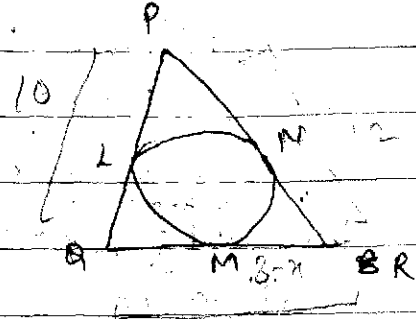
19.

$$PQ = 10 \text{ cm.}$$

$$QR = 8 \text{ cm.}$$

$$PR = 12 \text{ cm.}$$

$$QM = ? \quad RN = ? \quad PL = ?$$



Let QM be x $QM = QL = x$ (tangents from external point) ①

The $MR = 8 - x$ ($QR - QM$)

We know that tangents from external point are equal.

$$\therefore RN = MR \text{ --- ②}$$

$$RN = 8 - x$$

$$PN = PR - RN = 12 - (8 - x)$$

$$= 4 + x$$

$$PN = PL = 4 + x \text{ --- ③ (tangents from outside)}$$

Using ① & ③

$$PL + QL = PQ$$

$$4 + x + x = 10$$

$$4 + 2x = 10$$

$$2x = 6 \Rightarrow x = 3.$$

$QM = x$ (using ①)

$QM = 3$

$RN = 8 - x$ (using ①)

$P = 8 - 3$

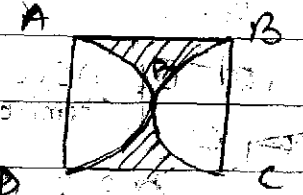
$RN \Rightarrow 5$ ✓

$PL = 4 + x$ (using ②)

$PL = 4 + 3$

$PL = 7$

200 Area of shaded = Ar of square -
 Ar of semicircle APD + Ar
 of semicircle BPC



$\Rightarrow a \times a - \left(\frac{\pi r^2}{2} + \frac{\pi r^2}{2} \right) \text{--- ①}$

\Rightarrow Side of square = 14 --- ②
 then $d =$ side of square

\therefore radius of circle = $\frac{14}{2} = 7 \text{ cm.}$ --- ③

put value of ② & ③ in ①

$\therefore 14 \times 14 - \left(\frac{2\pi r^2}{2} \right)$

$$\Rightarrow 196 - \frac{22 \times 7 \times 7}{7}$$

$$\Rightarrow 196 - 154$$

$$\Rightarrow 42 \text{ cm}^2$$

∴ Ar of shaded = 42 cm^2 .

Q1. Radius of hemisphere = 9 cm. (R)

Height of cylinder = 6 cm. (r)

H of cylinder = ?

When contents of bowl is emptied ^{are} in vessel then,

Vol. of bowl = Vol. of vessel
(hemisphere) (cylindrical)

$$\frac{2}{3} \pi R^3 = \pi r^2 h$$

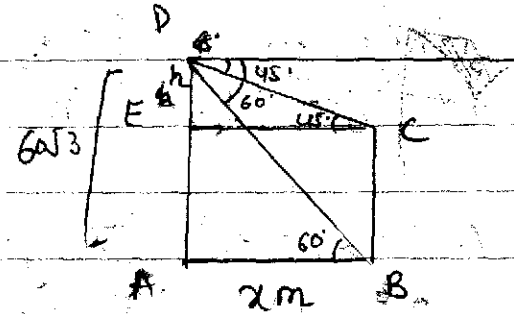
$$\Rightarrow \frac{2 \times 9^3 \times 9 \times 9}{3} = 6 \times 6 \times h$$

$$\Rightarrow h = \frac{2 \times 9 \times 9 \times 9 \times 9}{6 \times 6} = \frac{81}{6} = 13.5 \text{ cm.}$$

∴ Height of water in cylindrical vessel = 13.5 cm.

Q9.

Let AD be cliff of height $60\sqrt{3}$ m
& BC be tower of height $(60\sqrt{3}-h)$ m.
and ED be h m & AB be x m.



In $\triangle ABD$

$$\tan \theta = \frac{AD}{AB}$$

$$\tan 60 = \frac{60\sqrt{3}}{x} \Rightarrow \sqrt{3} = \frac{60\sqrt{3}}{x}$$

$$x = \frac{60\sqrt{3}}{\sqrt{3}} \Rightarrow 60 \quad \text{--- (1)}$$

$$AB = EC = 60$$

in $\triangle EDC$

$$\tan 45 = \frac{ED}{EC}$$

$$\tan 45 = \frac{h}{x} \Rightarrow 1 = \frac{h}{x}$$

$$h = x$$

put value of x from (1)

$$h = 60$$

Height of tower $60\sqrt{3} - 60$
 $60(\sqrt{3} - 1)$ m.

Q30(1)

A $(-2, -2)$ (x_1, y_1)

B $(2, -4)$ (x_2, y_2)

$(-2, -2)$

$(2, -4)$

A

P

B

$$AP = \frac{3}{7} AB$$

$$\Rightarrow \frac{AP}{AB} = \frac{3}{7}$$

$$\Rightarrow \frac{AP}{AB - AP} = \frac{3}{7 - 3}$$

$$\Rightarrow \frac{AP}{PB} = \frac{3}{4}$$

$$AP : PB = 3 : 4 \text{ (m:m)}$$

Let coordinates of P (x, y)

$$x = \frac{mx_2 + nx_1}{m+n}$$

$$y = \frac{my_2 + ny_1}{m+n}$$

$$x = \frac{3 \times 2 + 4 \times -2}{3+4}$$

$$y = \frac{3 \times -4 + 4 \times -2}{3+4}$$

$$x = \frac{6-8}{7}$$

$$y = \frac{-12-8}{7}$$

$$x = \frac{-2}{7}$$

$$y = \frac{-20}{7}$$

Coordinates of P = $\left(\frac{-2}{7}, \frac{-20}{7}\right)$

Q40 Let two natural no. be x and y.

ATQ $x+y = 8$ (i) and $xy = 15 \Rightarrow x = \frac{15}{y}$ (ii)

put value of x from (i) in (ii)

$$\frac{15}{y} + y = 8$$

$$\Rightarrow \frac{15+y^2}{y} = 8 \Rightarrow 15+y^2 = 8y$$

WIS 3200

$$y^2 - 8y + 15 = 0$$

$$y^2 - 3y - 5y + 15 = 0$$

$$y(y-3) - 5(y-3) = 0$$

$$(y-5)(y-3) = 0$$

$$\text{if } y-3 = 0 \text{ then } y=3$$

$$\text{if } y-5 = 0 \text{ then } y=5$$

$$\text{If } y=3 \quad x = \frac{15}{3} = 5$$

$$\text{If } y=5 \quad x = \frac{15}{5} = 3$$

No. due to 3 and 5 or 5 and 3.

25a) perfect square = 1, 4, 9, 16, 25, 36, 49, 64 = 8

Total sample = 70

$$P \text{ of perfect square} = \frac{\text{No. of } F}{\text{No. of } S}$$

$$= \frac{8}{70}$$

(ii) No. divisibly by 2 and 3

6, 12, 18, 24, 30, 36, 42, 48, 54, 60, 66 = 11

Total sample = 70

$$P \text{ of no. divisible by 6} = \frac{11}{70}$$

26. A(6, -1) B(k, -6) C(0, -7)

If points are collinear the area = 0.

$x_1 = 6$ $x_2 = k$ $x_3 = 0$ and $y_1 = -1$ $y_2 = -6$ $y_3 = -7$.

$$\frac{1}{2} (x_1(y_2 - y_3) + x_2(y_3 - y_1) + x_3(y_1 - y_2)) = 0$$

$$\frac{1}{2} (6(1-6(-7)) + k(-7+1)) + 0(-1-(-6)) = 0$$

$$\Rightarrow 6(17) + k(-7+1) + 0(-1+6) = 0$$

$$\Rightarrow 6(1) + k(-6) + 0 = 0$$

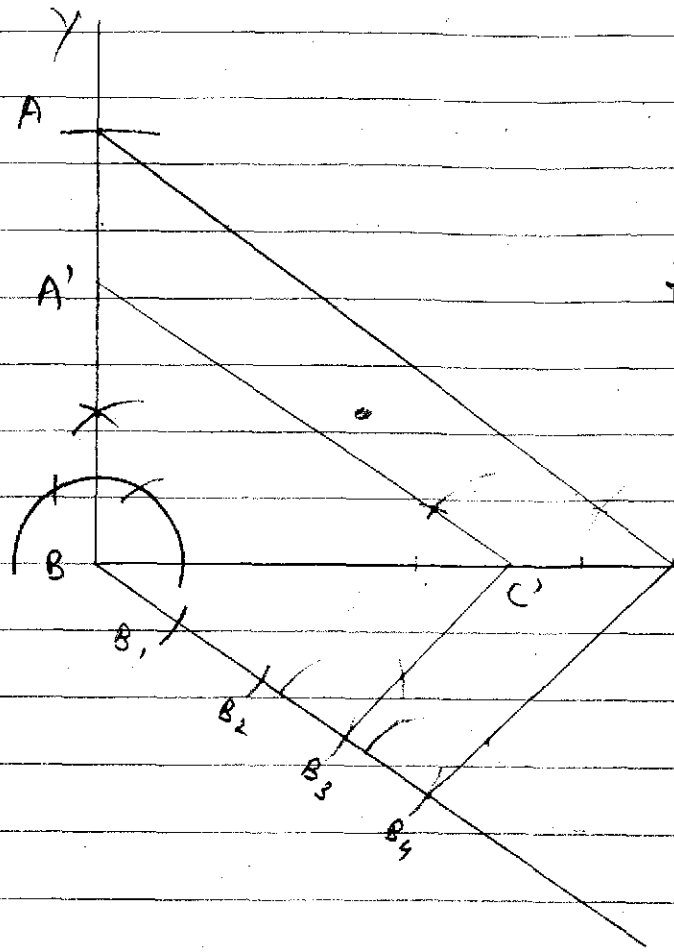
$$\Rightarrow 6 - 6k = 0$$

$$6 = 6k$$

$$k = 1$$

if points are collinear then $k=1$ Ans

27°



Steps.

1. Draw a line segment $BC = 8\text{cm}$.
2. Draw a right angle on $B \angle CBX$
3. with A as centre and AB as centre mark an arc on BY which intersect the line at A .
4. Join AC
- $\therefore \Delta ABC$ is obtained

5. Now, draw an acute $\angle CBX$ 6. Mark point equal point on BX such that $BB_1 = B_1B_2 = B_2B_3 = B_3B_4$ 6. Join B_4 to C 7. From B_3 draw a line \parallel to B_4C which intersect BC at C' 8. From C' draw line \parallel to AC which intersect AB at A' 9. Hence $\Delta A'B'C'$ is similar to

ΔABC whose sides is $\frac{3}{4}$ corresponding sides of ΔABC .

28: Multiple of 8 lying b/w 201 and 950 are.

208, 216, 224 - - - 944.

$$a = 208$$

$$d = 216 - 208 = 8.$$

$$a_n = 944$$

$$a_n = a + (n-1)d$$

$$944 = 208 + (n-1)8$$

$$944 - 208 = (n-1)8$$

$$\Rightarrow \frac{736}{8} = n-1$$

$$\Rightarrow 92 = n-1$$

$$\Rightarrow n = 93$$

~~$$S_n = \frac{n}{2} (2a + (n-1)d)$$~~

$$S_n = \frac{n}{2} (a + l)$$

$$S_{93} = \frac{93}{2} (\cancel{2000} 208 + 994)$$

$$S_{93} = \frac{93}{2} \times 1152 = 53568$$

$$= 53568 \text{ Am.}$$

Section-B.

11 (i) Prob of a red king = $\frac{\text{No. of F}}{\text{No. of S}}$

$$= \frac{2}{52} = \frac{1}{26}$$

(ii) Prob queen of a jack = $\frac{\text{No. of F}}{\text{No. of S}}$

$$= \frac{8}{52} = \frac{2}{13}$$

12 $AB = 8 \text{ cm}$
 $BC = 6 \text{ cm}$

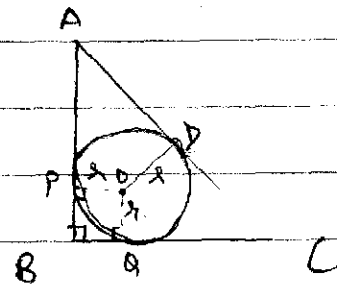
In right triangle ABC

$$AC^2 = AB^2 + BC^2$$

$$AC^2 = 8^2 + 6^2$$

$$AC^2 = 64 + 36$$

$$AC = \sqrt{100} = 10 \text{ cm.} \quad \text{--- (1)}$$



Join OP & OQ . $\Rightarrow OP \perp AB$ & $OQ \perp BC$ (tangent \perp to radius)

~~It is reqd.~~ $\therefore \angle OPB = 90^\circ$ and $\angle OQB = 90^\circ$

in quad. $OPBQ$

$$\angle P = \angle B = \angle Q = 90^\circ$$

and $PO = OQ$.

\therefore it is square. $\therefore OP = PB = BQ = OQ$

then $PB = BQ = x$.

$$BC - BQ = QC$$

$$6 - x = QC$$

But $QC = CD$ (tangent from external point)

$$QC = CD = 6 - x \quad \text{--- (i)}$$

$$AB - PB = AP$$

$$8 - x = AP$$

But $AP = AD$ (tangent from external point)

$$AP = AD = 8 - x \quad \text{--- (ii)}$$

$$AD + CD = AC$$

$$8 - r + 6 - r = 10 \quad (\text{from (i) \& (ii) \& (iii)})$$

$$14 - 2r = 10$$

$$4 = 2r$$

$$r = 2$$

$$r = 2 \text{ cm}$$

130

Side of square = 4 cm

r of quad = 1 cm

r of circle = 1 cm

Area of shaded = ~~Area of~~

Ar of square = (Ar of 4 quad + area of circle)

$$4 \times 4 - \left(4 \times \frac{\pi r^2}{4} + \pi r^2 \right)$$

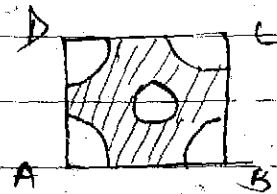
$$\Rightarrow 4 \times 4 - (2 \pi r^2)$$

$$\Rightarrow 16 - 2 \times 3.14 \times 1 \times 1$$

$$\Rightarrow 16 - 2 \times 3.14$$

$$\Rightarrow 16 - 6.28 \Rightarrow 9.72$$

$$\therefore \text{Area of shaded} = 9.72 \text{ cm}^2$$



14. $P(2, 4)$ $A(5, k)$ $B(k, 7)$

ATQ $PA = PB$

$$\sqrt{(2-5)^2 + (4-k)^2} = \sqrt{(2-k)^2 + (4-7)^2}$$

Sq. both side

$$(-3)^2 + (4-k)^2 = (2-k)^2 + (-3)^2$$

$$9 + 16 + k^2 - 8k = 4 + k^2 - 4k + 9$$

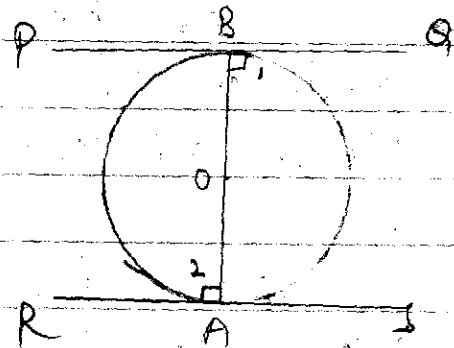
$$16 + k^2 - 8k = 4 + k^2 - 4k$$

$$312 = 4k$$

$$k = 3. \quad \underline{\text{Ans.}}$$

15. Given \Rightarrow AOB is diameter and
 PQ, RS are tangents to circle
at point B, A respectively
To prove $\Rightarrow PQ \parallel RS$

Let $\angle QBA = 1$
and $\angle RAB = 2.$



Proof) PO is tangent and OA is radius
 $\therefore AO \perp PO$ (tangent is \perp to radius)
 $\therefore \angle 1 = 90^\circ$ (i)

RS is tangent and OB is radius
 $\therefore \angle 2 = 90^\circ$ (ii)
 from (i) & (ii)

$\angle 1 = \angle 2 = 90^\circ$
 But they are alternate angles
 $\therefore PQ \parallel RS$

16) Radius of sphere = 10.5 (R)
 Radius of cone = 3.5 cm
 Height of cone = 3 cm

If sphere is recast into smaller cones then
 No. of cones = $\frac{\text{Vol. of sphere}}{\text{Vol. of 1 cone}}$

$$\frac{4 \times R^3}{8}$$

$$\frac{1 \times R^2 h}{3}$$

$$\Rightarrow 4 \times 10^{15} \times 10^{15} \times 10^{15} \times 3$$

$$3^{15} \times 3^{15} \times 3 \times 10$$

$$\Rightarrow 2 \times 4 \times 10^{15} \times 3 \times 3$$

$$3 \times 10^5$$

$$\Rightarrow 21 \times 6$$

$$\Rightarrow 126 \text{ cones.}$$

17. $kx(3x-4)+4=0$

$$D=0 \text{ (given)}$$

$$3kx^2 - 4kx + 4 = 0$$

$$D = b^2 - 4ac = 0$$

$$(-4k)^2 - 4 \times 3k \times 4$$

$$16k^2 - 48k = 0$$

$$16k(k-3) = 0$$

$$\text{if } 16k = 0 \Rightarrow k = 0 \text{ (Rejected)}$$

$$\text{if } k-3 = 0 \Rightarrow k = 3 \text{ Ans.}$$

18. Three digit no. which are divisible by 11 are.

$$110, 121, \dots, 990$$

$$a = 110$$

$$d = 121 - 110 = 11$$

$$a_n = 990$$

$$n = ?$$

$$a_n = a + (n-1)d$$

$$990 = 110 + (n-1)11$$

$$990 - 110 = (n-1)11$$

$$880 = n-1$$

$$\underline{+1}$$

$$n = 81.$$

There are 81 (3 digit no) which are divisible by 11.

Section A

11. (C) (4) ✓
 12. (A) (7.5) ✓
 13. (A) $\left(\frac{1}{2}\right)$ ✓
 14. (C) (5) ✓
 15. (B) (15) ✓
 16. (B) $\left(2, -\frac{3}{2}\right)$
 17. (C) (4) ✓
 18. (C) 77 ✓
 19. (D) 1:8. $\frac{8}{8}$
 20. (B) (30) ✓

