

केन्द्रीय माध्यमिक शिक्षा बोर्ड, दिल्ली
सीनियर स्कूल सर्टिफिकेट परीक्षा (कक्षा बारहवीं)
परीक्षार्थी प्रवेश-पत्र के अनुसार भरे

विषय Subject: Physics (042)

परीक्षा का दिन एवं तिथि :
Day & Date of the Examination : 1/3/11 Tuesday

उत्तर देने का माध्यम
Medium of answering the paper : English

प्रश्न पत्र के ऊपर लिखे कोड को दर्शाए
Write Code No. as written on the top
of the Question paper:

55/1

परीक्षा के अतिरिक्त पुस्तिका (ओं) की संख्या
No. of supplementary answer-book(s) used

3.

यदि शारीरिक अक्षमता से प्रभावित हो तो संबंधित वर्ग में ✓ का निशान लगाएँ।
If physically challenged, tick the category

B D H S C

B = Blind, D = Deaf & Dumb, H = Physically Handicapped, S = Spastic, C = Dyslexic

किसी भी भाग में सहायक उपकरण प्रदान नहीं किया गया है।
No special aid or device is provided.

Yes / No

NO

प्रश्न पत्र के प्रत्येक भाग के बीच एक खाली बॉक्स छोड़ दें। यदि परीक्षार्थी का नाम 24 अक्षरों से अधिक है तो केवल प्रथम 24 अक्षर ही लिखें।
Leave one blank box between each part of the question paper. If the candidate's Name exceeds 24 letters, write first 24 letters.

Write in one box and one box be left blank between each part of the question paper. If the candidate's Name exceeds 24 letters, write first 24 letters.

to Candidates

Answer-book contains 32 pages and
(Including title page) as soon as

Initial sign or mark in or out side
answer-book, graph-paper, map etc
, name of your school or place
answers.

Primary answer-book serial no

both sides and do not waste pages

pages of the answer-book and do
necessarily. No supplementary answe
for unless this answer-book / t
ver-book is finished.

Refer to their numbers in the quest

or a part thereof) is finished.

Do not write with supplementary answer-book
ed by you, but DO NOT write yo
r answer-book, graph-paper, map e
blue ink.

Leave appropriate margin on the right-ha
rawn. The rough calculations et
ords.

Do not write in the blank space
ation hall without handing over to
st.

In case a candidate is found indulging
hall be deemed to have used unfa
nd as such his/her result shall not
s UNFAIRMEANS (U.F.M.):-

Use of papers, books, notes or any othe
relevant to the examination in th

Use of mobile directly or indirectly of an

Use of any material other than that
by the Centre Superintendent for

Use of answer-book or supplementar

Use of any person or trying to do so with any person
Staff during the examination time

Use of any other method of cheating
out of the examination hall/room

Use of any other undesirable method of
ie examination;

Use of any paper or its part or smuggling of
any answer-sheet or part thereof

Use of any other means or methods
cially connected with the conduct
teering of any of the candidates.


सिनिगर स्कूल सर्टिफिकेट परीक्षा (दशम, बारहवीं) केन्द्रीय माध्यमिक शिक्षा बोर्ड, दिल्ली
SENIOR SCHOOL CERTIFICATE EXAMINATION (CLASS XII) CENTRAL BOARD OF SECONDARY EDUCATION, DELHI



प्रमाणित किया जाता है कि मैंने इस उत्तर-पुस्तिका का मूल्यांकन प्रश्न पत्र के समुचित संदर्भ के अ
किया है।
Certified that I have evaluated this answer book according to the correct set of ques
paper.

- ① Electric dipole moment for a dipole is defined as the ~~charge~~ ^{product} on either charge (magnitude) of the dipole and the distance between the two charges. It is a vector quantity and is denoted by 'p'. Its direction is from negative to positive. Its SI unit is C-m.

$$\vec{p} = \vec{q} \times (2a)$$



② The angle of dip at the pole is, 90°


③ The potential on all points on the surface of a hollow metal sphere is constant and also the potential inside is the same

$$\therefore V \text{ on surface} = 10V$$

$$\therefore V \text{ on } \text{at the centre} = \underline{10V}$$

④ Radio waves can be produced ~~by~~ by an accelerated charged particle. Radio waves have wavelength $0.3 - 600 \text{ m}$.

- (5) Characteristics of nuclear forces :-
→ They are non central forces. They are the strongest forces found in nature.
→ They show saturation properties and don't depend on the charge on nucleons.



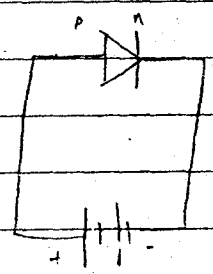
Using Lenz's Law, we know that the charge will be induced in such a way so as to oppose the change in magnetic flux (Φ_B)

\therefore Plate A (upper plate) becomes positively charged.
Plate B (lower plate) becomes negatively charged.


⑦

(i) In forward biased p-n junction, the length of the depletion layer decreases and hence it offers lower resistance

(ii) In reverse biased p-n junction the length of the depletion layer increases and hence it offers greater resistance



forward biased



reverse biased

③ Stopping potential is defined as the maximum negative potential of an electrode (anode) for which the kinetic energy (maximum) of the emitted photoelectron becomes 0. It is denoted by V_0 .


$$eV_0 = h\nu - \phi_0$$

where $eV_0 = \text{KE of particle}$

$\nu = \text{incident frequency}$

$\phi = \text{work function}$

(9)



Given:-

λ = surface charge density.

Applying Gauss theorem

$$\phi_E = \frac{q}{\epsilon_0}$$

where q = total charge enclosed by the cylinder.

$$\phi_E = \frac{\lambda l}{\epsilon_0}$$

$$\text{as } (q = \lambda l)$$

(Outward if wire is positively charged)

(Inward if wire is negatively charged)

(10) Acc. to Coulomb's Law

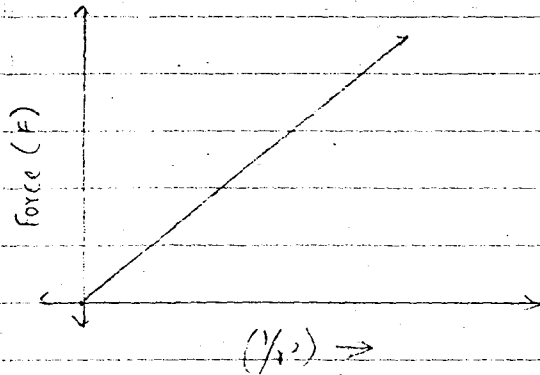
$$F = \frac{kq_1q_2}{r^2}$$

where $q_1, q_2 =$ are charges
 $r =$ distance b/w them

$k =$ constant

$$\therefore F \propto \frac{1}{r^2}$$

(a) (1 μ C, 2 μ C)



\Rightarrow Force is repulsive

\Rightarrow when $\frac{1}{r^2} = 0$, i.e. $r \rightarrow \infty$

Force is 0

\Rightarrow slope of graph = $kq_1q_2 = +ve$

(ii) Expression for Lorentz force.

$$\vec{F} = q (\vec{v} \times \vec{B})$$

where F = Lorentz force

q = charge on particle

\vec{v} = velocity vector of particle.

\vec{B} = magnetic field intensity.

$$\text{Work done} = F \cdot d$$

$$= Fd \cos \theta$$

where d = displacement.

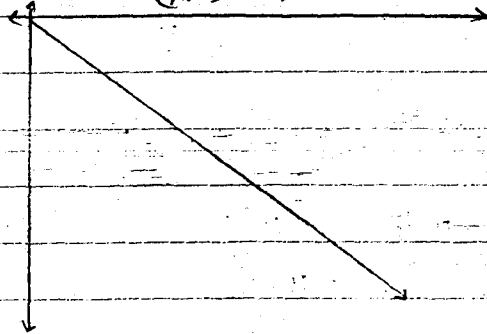
But since force applied is always at 90° to velocity vector
i.e. displacement

$$W = Fd \cos 90^\circ$$

$$W = 0$$

(b) $(2\mu\text{C}, -3\mu\text{C})$
 $(\frac{1}{r^2}) \rightarrow$

Force
(F)
↓



⇒ Force is attractive

⇒ When $\frac{1}{r^2} = 0$, i.e. $r \rightarrow \infty$,
 $F = 0$

⇒ slope of graph = $kq_1q_2 = -ve$

(12) Eddy currents are currents that are induced in a closed circuit or coil due to a changing magnetic flux linked with the circuit/coil.

$$i = -\frac{d\phi}{dt} = -\frac{\epsilon_{\text{induced}}}{r}$$

The (-) sign indicates that current induced opposes the change in magnetic flux (Lenz's law).

Application


→ It is used in induction motors and heaters.

→ It is used in speedometers and odometers for vehicles.

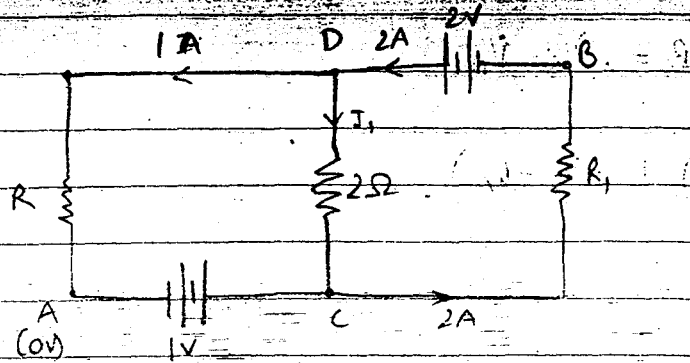
(13) Sky wave communication is a mode of communication in which the wave is projected towards the sky where it is deflected by the ions in the ionosphere to reach a receiver far away.

Its range is 3 - 30 MHz.

This is so because waves of higher frequency are not deflected by the ionosphere and pass into space.



(14)



Applying Kirchoff's 1st law at junction 'D'.

$$1 + I_1 = 2$$

$$\Rightarrow \boxed{I_1 = 1A}$$

Potential at A = 0 V

\therefore Potential at C = 1 V = $V_C - V_A$

Potential b/w D and C = $V_D - V_C = 2(1) = 2V$

Potential b/w D and B = $V_B - V_D = -2V$

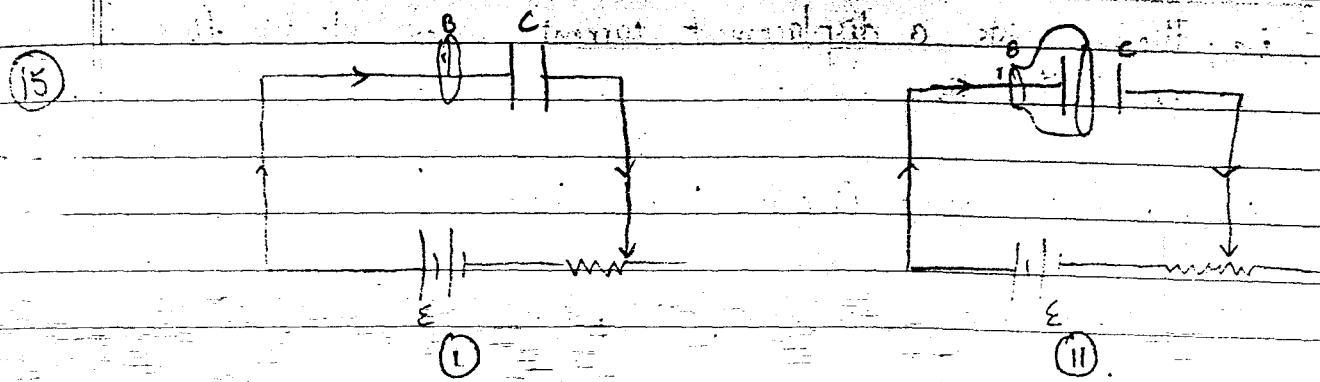
$$\therefore \text{Potential b/w A and B} = V_B - V_A$$

$$= (V_B - V_D) + (V_D - V_C) + (V_C - V_A)$$

$$= -2 + 2 + 1$$

$$= 1 \text{ V.}$$

∴ Potential at B = 1V //



Ampere's law states that

$$\oint \mathbf{B} \cdot d\mathbf{l} = \mu_0 I$$

But there is a drawback here

In fig (I), at point B, there is a magnetic field as current I is ~~through~~ threading the loop.

But in fig (II) for a tiffin box shaped surface, magnetic field at B becomes 0.

\therefore Maxwell introduced another term in the law

$$I_D = \epsilon_0 \frac{d\phi_E}{dt}$$

i.e there exists a displacement current when electric flux is changing with time


∴ Modified ampere's Circuit law become

$$\oint \mathbf{B} \cdot d\mathbf{l} = \phi_B = \mu_0 (I + I_D)$$

(16) Let each capacitor have a capacitance of C .

When they are in series

$$\frac{1}{C_s} = \frac{1}{C} + \frac{1}{C} + \frac{1}{C}$$



$$\frac{1}{C_s} = \frac{3}{C}$$

$$\Rightarrow C_s = \frac{C}{3}$$


$$1\mu F = \frac{C}{3}$$

(given $C_s = 1\mu F$)

$$\Rightarrow C = 3\mu F$$

When connected in parallel.

$$C_p = C + C + C = 3C$$



$$C_p = 9\mu F$$

When connected to same source V .

$$E_s = \frac{1}{2} C_s V^2$$

$$E_s = \frac{1}{2} (1) V^2$$

$$E_p = \frac{1}{2} C_p V^2$$

$$= \frac{1}{2} (9) V^2$$

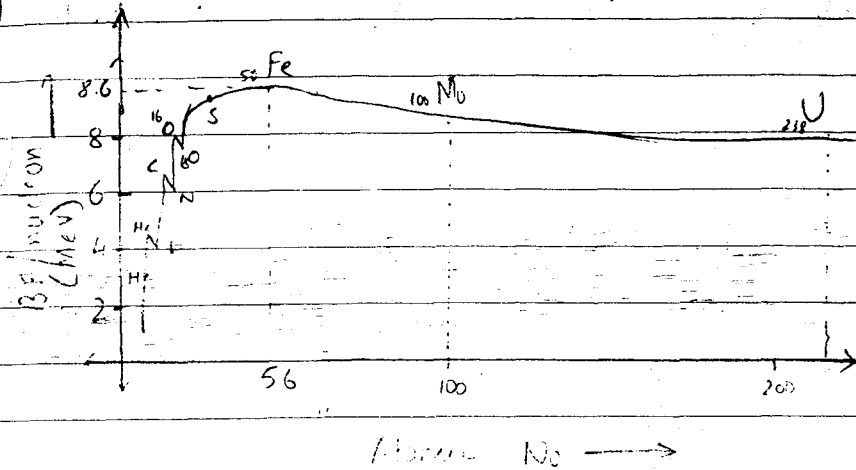
E_s = Energy in series
combination

E_p = Energy in parallel
combination.

$$\therefore \frac{E_s}{E_p} = \frac{1}{9}$$

$$E_s : E_p = 1 : 9$$

(17)



Nuclear Fission

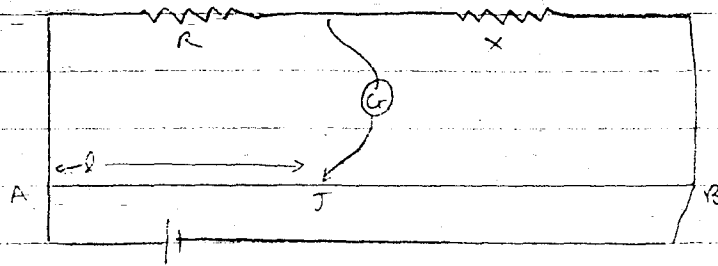
→ When a ^a heavy nucleus disintegrates into smaller, lighter nuclei, we can see from the graph that Binding energy/nucleon increases. Thus energy is released when a heavy nucleus disintegrates to give almost equal fragments, energy is released.

Nuclear fusion

→ When two lighter nuclei fuse together to give a heavy nucleus we again see an increase in binding energy/nucleon. Thus energy is released.

in a nuclear fusion reaction.

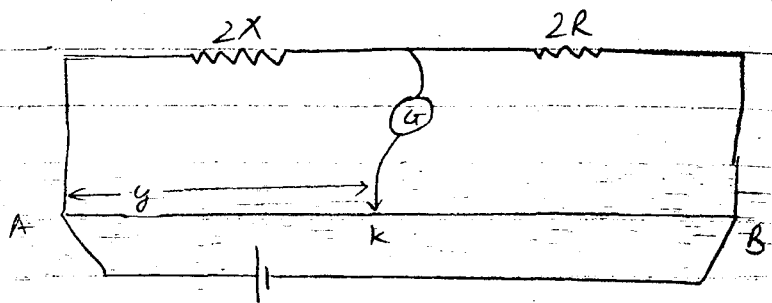
(18)



Acc. to wheatstone bridge principle,

$$\frac{R}{X} = \frac{l}{100-l} \quad \text{--- (1)}$$

(i) ~~When~~ If R becomes $2R$ and X becomes $2X$.



Again acc. to wheatstone bridge principle

$$\frac{2X}{2R} = \frac{y}{100-y}$$

$$\Rightarrow \frac{X}{R} = \frac{y}{100-y} \quad \text{--- (ii)}$$

Comparing (i) and (ii).

$$\boxed{y = 100 - l}$$

$$100 - y = l$$

→ New position of balance point.

(ii) If galvanometer and battery are interchanged, there will be no effect on balance point.

(19) Given: $\rightarrow \mu_g = 1.5$ \rightarrow ~~Diverging~~ Converging lens (Convex).

(i) $\mu_r = 1.5$

$$(a) \frac{1}{f_{air}} = (\mu - 1) \left(\frac{1}{R_1} - \frac{1}{R_2} \right) \quad (\text{lens makers formula})$$

$$\Rightarrow \frac{1}{f_{air}} = (1.5 - 1) \left(\frac{1}{R_1} - \frac{1}{R_2} \right) \quad \text{--- (1)}$$

$$\frac{1}{f_{medium}} = \underbrace{\left(\frac{1.5}{1.65} - 1 \right)}_{\downarrow} \left(\frac{1}{R_1} - \frac{1}{R_2} \right) \quad \text{--- (11)}$$

$$\Rightarrow \frac{1}{f_{medium}} = -ve$$

\therefore It will behave as a diverging lens.

(b) Dividing (11) by (1)

$$\frac{f_{medium}}{f_{air}} = \frac{(1.5 - 1)}{(1.5 - 1)}$$

$$f_{air} = \frac{(1.5 - 1)}{1.65 - 1}$$

$$\Rightarrow \frac{f_{\text{medium}}}{f_{\text{air}}} = \frac{-0.5 \times 1.65}{0.15} = -5.5$$

$$f_{\text{medium}} = -5.5 f_{\text{air}}$$

(ii) $\mu_m = 1.33$

$$(a) \frac{1}{f_{\text{medium}}} = \left(\frac{1.5}{1.33} - 1 \right) \left(\frac{1}{R_1} - \frac{1}{R_2} \right) \quad \text{--- (iii)}$$

$$\frac{1}{f_{\text{medium}}} = +ve$$

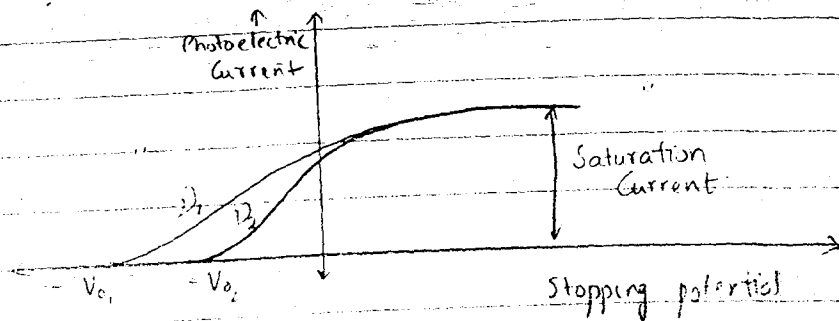
It will behave as a converging lens.

(b) Dividing (i) by (iii)

$$\frac{f_{\text{medium}}}{f_{\text{air}}} = \frac{0.5 \times 1.33}{1.5 - 1.33} \approx \frac{0.5 \times 4}{3 \left(1.5 - \frac{4}{3}\right)} = \frac{0.5 \times 4 \times 3}{3 \times 0.5} = 4$$

$$\therefore f_{\text{medium}} = 4 \times f_{\text{air}}$$

(20)



As we can see from the graph:

$$\boxed{\text{Stopping potential for } \lambda_1 > \text{Stopping potential for } \lambda_2}$$

Acc. to Einstein's equation

$$eV_0 = h\nu - \phi_0$$

where V_0 = stopping potential

ϕ_0 = work function

ν = incident frequency

For ν_1 ,

$$eV_{01} = h\nu_1 - \phi_0 \quad \text{--- (I)}$$

for ν_2 ,

$$eV_{02} = h\nu_2 - \phi_0 \quad \text{--- (II)}$$

$$\text{(I) --- (II)}$$

$$e(V_{01} - V_{02}) = h(\nu_1 - \nu_2)$$

$$V_{01} - V_{02} = \frac{h}{e} (\nu_1 - \nu_2)$$

$$\text{as } \nu_1 > \nu_2 \quad (\text{given}),$$

$$V_{01} - V_{02} = +ve$$

$$\therefore \boxed{V_{01} > V_{02}}$$

(21) (1) → Height of antennae

It is required for the height of antenna to be at least $(\lambda/4)$ where $\lambda \rightarrow$ wavelength of transmission to avoid distortion and for clear transmission. Thus, for lower frequencies, λ is high, thus height is very large. But for higher frequencies, λ is small, thus height is small.

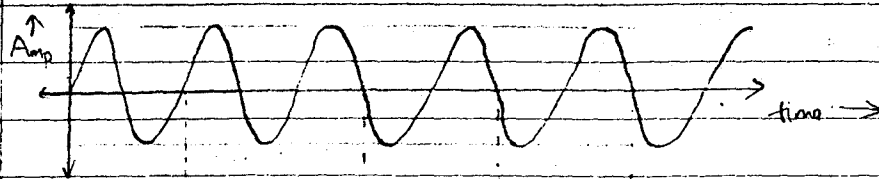
This follows from the relation

$$\boxed{v\lambda = c}$$

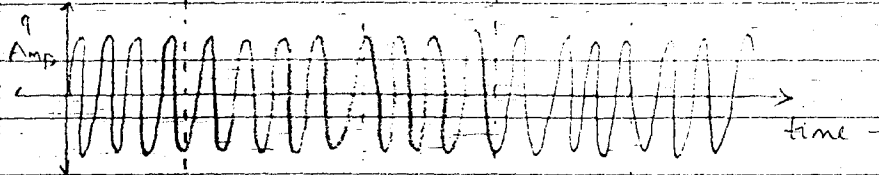
(2) Power Radiated

The power radiated is proportional to $(1/\lambda)^2$. Thus for lower frequency, this power is low as λ is high. But for higher frequencies, λ is small, thus power radiated is more.

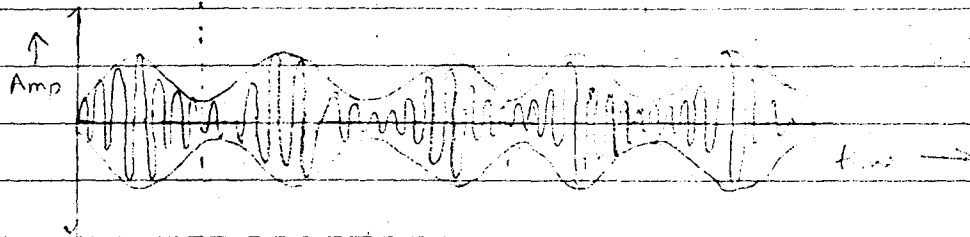
Hence we need to modulate the original signal on higher frequency carrier wave.



Original wave



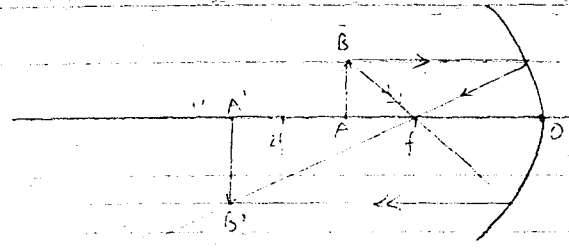
Carrier wave



Amplitude modulated wave

~~Q1~~ Q2

22(a) Mirror formula $\frac{1}{f} = \frac{1}{v} + \frac{1}{u}$



Let object distance (u) = $-(f+x)$ where $x < f$.
 (taking sign convention)


$$\therefore \frac{-1}{f+x} = \frac{1}{v} - \frac{1}{f+x}$$

$$\Rightarrow \frac{1}{v} = \frac{1}{f+x} - \frac{1}{f} = \frac{f-f-x}{f(f+x)} = \frac{x-f-f}{f(f+x)}$$

$$v = -f \frac{(f+x)}{x}$$

Thus image is real and beyond $2f$.

(b)



Let object distance = $-u$.
focal length = f .

(as u is negative)
(sign convention)


$$\therefore \frac{1}{f} = \frac{1}{v} + \frac{1}{(-u)}$$

$$\Rightarrow \frac{1}{f} + \frac{1}{u} = \frac{1}{v}$$

$$\Rightarrow v = \frac{uf}{u+f}$$

Thus image distance is positive
 \rightarrow Virtual image.

c)



Let $(-u)$ be ~~object~~ ^{object} distance $u < f$ (sign convention)

$$\therefore \frac{-1}{f} = \frac{1}{v} + \frac{1}{(-u)}$$

$$\frac{-1}{f} - \frac{1}{(-u)} = \frac{1}{v}$$

Let $u = (f - x)$ $x < f$

$$\Rightarrow \frac{-1}{f} - \frac{1}{f-x} = \frac{1}{v}$$

$$v = \frac{f(f-x)}{\cancel{f(x-2f)}} = +ve$$

$$m = \frac{-v}{u} = \frac{f(f-x)}{\cancel{f(x-2f)}(f-x)} > 1$$

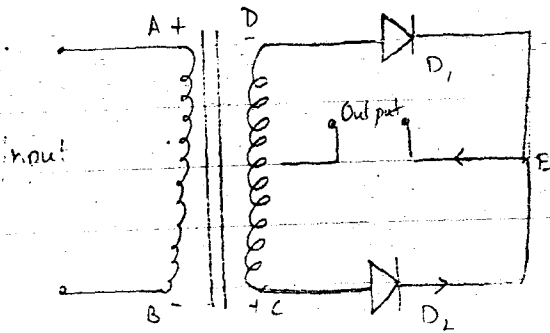
∴ Image is virtual and enlarged.

अपना अनुक्रमांक इस उत्तर-पुस्तिका पर न लिखें

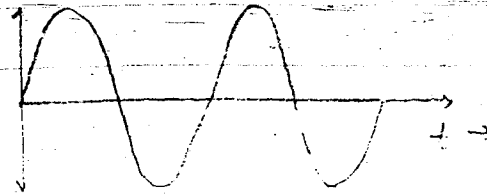
Please do not write your Roll Number on this Answer-Book

अतिरिक्त उत्तर-पुस्तिका (ओं) की संख्या.....
Supplementary Answer-Book(s) No.....

(23)




Input (AC)


Working

- A full wave rectifier consists of 2 p-n diodes connected across the same output line.

Output (DC)



① When A is +ve and B is -ve, due to induction D becomes -ve and C becomes +ve. Thus D_2 becomes forward biased and allows current to pass. But D_1 doesn't, being reverse biased.



② When A becomes -ve and B +ve in 2nd half cycle, C acquires -ve and D becomes +ve. Thus D_1 becomes forward bias and conducts electricity but D_2 doesn't.

Principle:

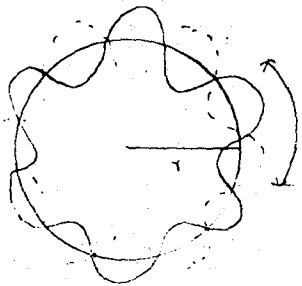
An ideal diode acts like a conductor when forward biased but doesn't conduct electric current when it is reverse biased.

24(a)

24(a) Bohr's Second Postulate

Electrons can only revolve in certain fixed orbits called stationary orbits. In these stationary orbits the angular momentum of the e^- is an integral multiple of ~~h~~ $\left(\frac{h}{2\pi}\right)$.

$$mvr = \frac{nh}{2\pi}$$



For integral no. of waves
 $2\pi r = n\lambda$

Acc. to de Broglie's hypothesis
 $\lambda = \frac{h}{mv}$

$$\therefore 2\pi r = \frac{nh}{mv}$$

$$\Rightarrow \boxed{mvr = \frac{nh}{2\pi}}$$

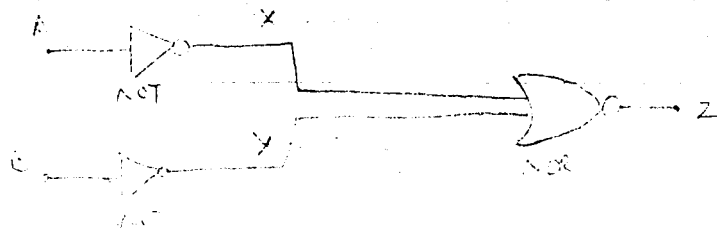
Hence Proved

24 (b) Total energy = -13.6 eV .

Kinetic energy = $-TE = \underline{13.6 \text{ eV}}$.

Potential energy = $-2KE = -2 \times 13.6 = \underline{-27.2 \text{ eV}}$.

25




A	B	X	Y	Z
0	0	1	1	0
0	1	1	0	0
1	0	0	1	0
1	1	0	0	1

26

Looking at the truth table it is a

AND Gate.



(26)

$$f_o = 4 \text{ cm}$$

$$f_e = 10 \text{ cm}$$

$$u_o = -6 \text{ cm}$$

$$\frac{1}{f_o} = \frac{1}{v_o} - \frac{1}{u_o}$$

(lens formula)

$$\Rightarrow \frac{1}{4} - \frac{1}{6} = \frac{1}{v_o}$$

$$\Rightarrow \frac{3-2}{12} = \frac{1}{v_o} = \frac{1}{12}$$

$$\underline{\underline{v_o = 12 \text{ cm}}}$$

\therefore Length of microscope = 12 cm

$$\text{Magnifying power} = - \frac{L}{u_o} \left(1 + \frac{d}{f_e} \right)$$

$$= - \frac{12.32}{6} \left(1 + \frac{2.5}{18} \right)$$
$$= ~~1000~~ 7$$

$$\boxed{\text{Magnifying power} = ~~1000~~ 7}$$

(-ve sign denotes inverted image)

If we approximate $u_o = f_o$.

$$\text{Magnifying power} = - \frac{L}{f_o} \left(1 + \frac{d}{f_e} \right)$$

$$= - 3 (3.5)$$
$$= -10.5$$

$$\boxed{\text{Magnifying power} = -10.5}$$

(27) Element I

$$R = R_1$$

$$V = V$$

$$P = P_1$$

Element II

$$R = R_2$$

$$V = V$$

$$P = P_2$$

Now,

$$P = \frac{V^2}{R}$$

$$P_1 = \frac{V^2}{R_1} \quad \text{and} \quad P_2 = \frac{V^2}{R_2} \quad \text{--- (1)}$$

(i) When connected in series

$$R_{\text{net}} = R_1 + R_2$$

From (1) and (1)

$$R_{\text{net}} = V^2 \left(\frac{1}{P_1} + \frac{1}{P_2} \right)$$

$$\text{Power} = \frac{V^2}{R_{\text{net}}} = \frac{V^2}{V^2 \left(\frac{1}{P_1} + \frac{1}{P_2} \right)}$$

$$= \frac{P_1 P_2}{P_1 + P_2} = \text{Power}$$

When connected in parallel

$$\frac{1}{R_{\text{net}}} = \frac{1}{R_1} + \frac{1}{R_2}$$

Using ① and ②.

$$\frac{1}{R_{\text{net}}} = \frac{P_1}{V^2} + \frac{P_2}{V^2} = \frac{1}{V^2} (P_1 + P_2)$$

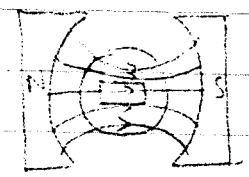
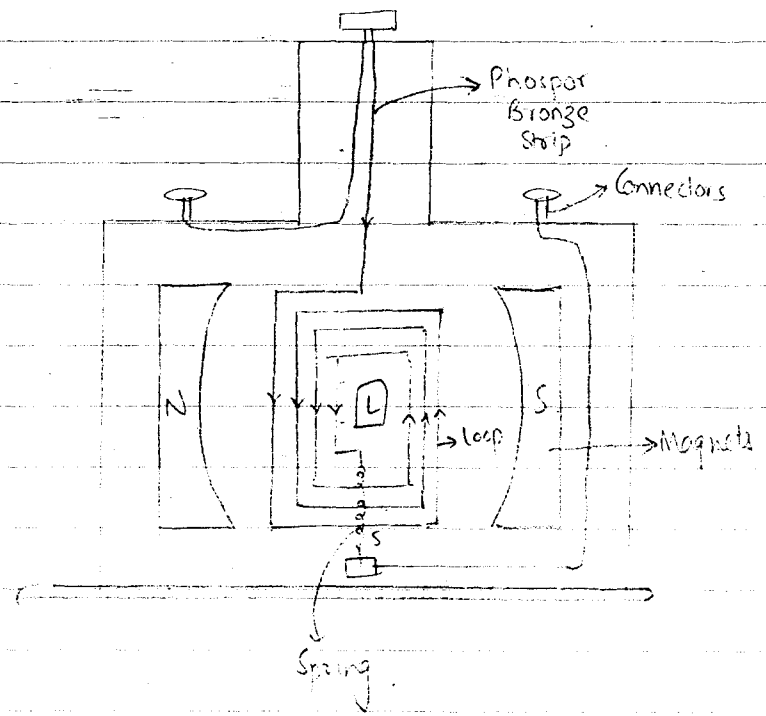
$$\therefore \text{Power} = \frac{V^2}{R_{\text{net}}} = \frac{V^2}{V^2} \times \frac{1}{V^2} (P_1 + P_2) \rightarrow$$

$$\boxed{\text{Power} = P_1 + P_2}$$

अपना अनुक्रमांक इस उत्तर-पुस्तिका पर न लिखें
Please do not write your Roll Number on this Answer-Book

अतिरिक्त उत्तर-पुस्तिका (ओं) की संख्या.....
Supplementary Answer-Book(s) No. 2

28(a)



Radial field

Principle:

The principle of a moving coil galvanometer is that a current carrying loop in a magnet field experiences a torque.

$$\tau = nIBA$$

(for radial field $\theta = 90^\circ$).

where n = no. of turns in loop.

I = current in loop

B = magnetic field.

A = Area of loop.

(b) for a galvanometer at equilibrium
 $k\theta = nBIA$.

(where k = spring constant
 θ = angle moved)

$$\therefore \frac{\theta}{I} = \frac{nBA}{k}$$

$$\boxed{I_s = \frac{nBA}{k}} \quad \text{Current Sensitivity.}$$

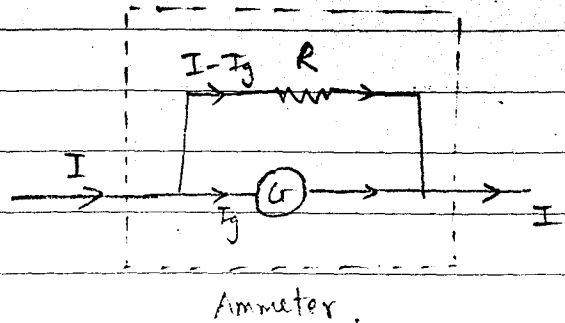
To improve I_s , the easiest way is to increase the no. of turns in the loop. But due to this the resistance (R) of the loop also increases.

$$\boxed{V_s = \frac{nBA}{kR}} = \text{Voltage Sensitivity.}$$

$$\therefore V_s \propto \frac{1}{R} \quad R \uparrow, V_s \downarrow.$$

\therefore Increasing current sensitivity of a galvanometer may not necessarily increase its voltage sensitivity.

(c)

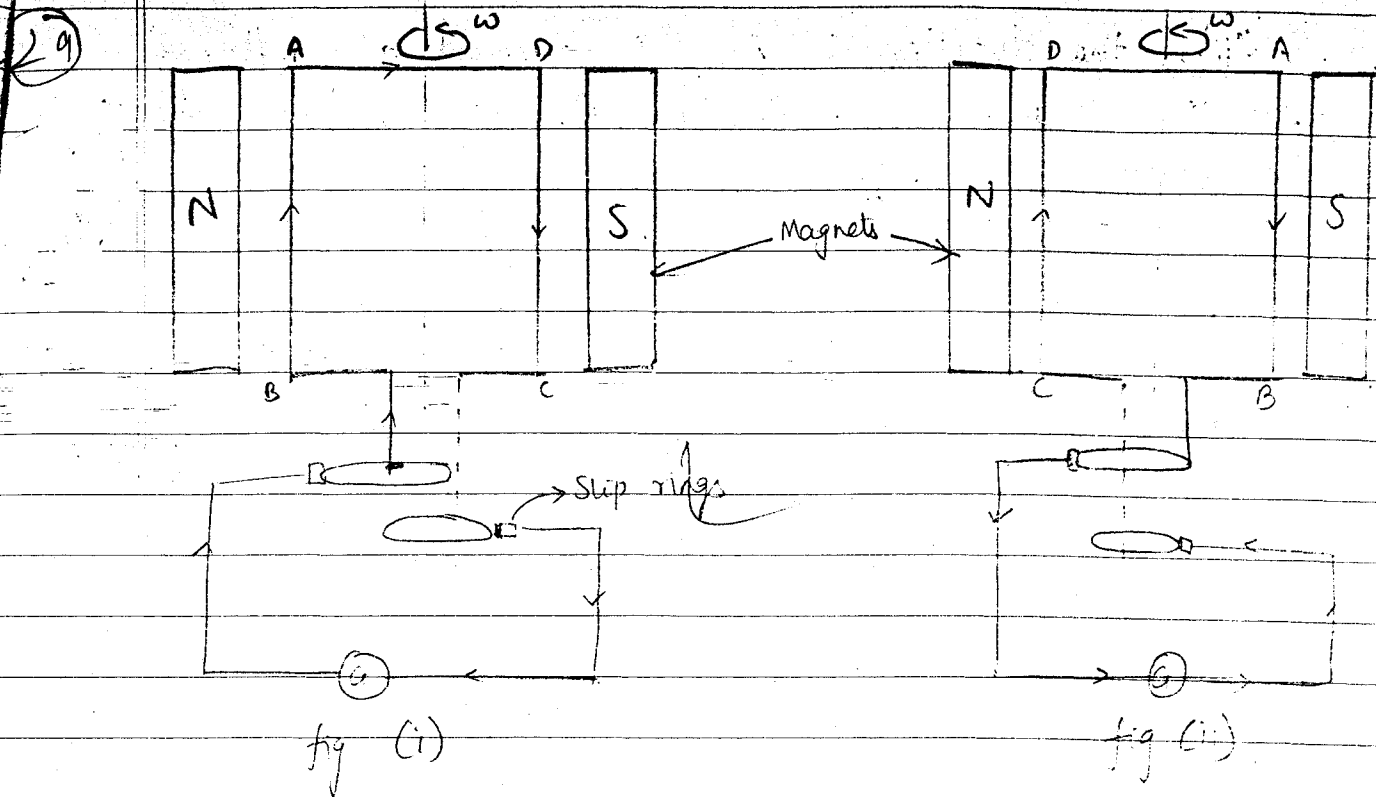


To measure current I , using galvanometer of max current I_g we need to connect a low resistance resistor in parallel called a shunt.

$$\therefore I_g G = (I - I_g) R$$

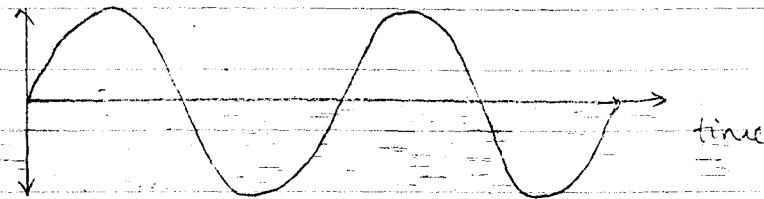
$$R = \left(\frac{I_g}{I - I_g} \right) G$$

$\therefore R$ can be calculated.



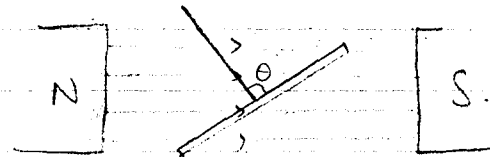
An ac generator consists of a coil being rotated in a magnetic field. The changing magnetic flux leads to generation of emf. From fig (i), from Fleming's right hand rule, the direction in AB is from up to down. Thus current in the circuit flows in a clockwise direction.

From fig (ii), the direction is AB, B reversed i.e. after a half cycle current in the circuit now flows in clockwise direction. Thus ac. voltage is generated.



Upper half
fig (i)

Lower half
fig (ii)



$$\phi = NBA \cos \theta$$

$$\text{But } \frac{\theta}{t} = \omega \Rightarrow \theta = \omega t$$

$$\therefore \phi = NBA \cos \omega t$$

where N = number of turns

A = area

B = magnetic field

ω = angular velocity.

fer u
sub

$$\mathcal{E} = -\frac{d\phi}{dt} + NBA\omega \sin \omega t$$

$$\therefore \mathcal{E} = NBA\omega \sin \omega t$$

$$\mathcal{E}_{\max} = NBA\omega$$

The generator doesn't generate electricity it only converts one form to another.

It converts the mechanical energy to rotate the coil into electrical energy.

(30) Coherent sources are those sources which emit light ~~at~~ in phase or at a constant phase difference.

These are very important to obtain interference. If the sources are non coherent, then the phase between them keeps on changing, which makes the interference ~~not~~ unsustained and the bright and dark fringes cannot be differentiated. The screen appears to be of uniform intensity.

Let

$$y_1 = A_1 \sin(\omega t)$$

$$y_2 = A_2 \sin(\omega t + \phi)$$

By superposition principle

$$y = y_1 + y_2$$

$$\Rightarrow y = A_1 \sin \omega t + A_2 (\sin \omega t \cos \phi + \cos \omega t \sin \phi)$$

$$\Rightarrow y = A_1 \sin \omega t + A_2 \sin \omega t \cos \phi + A_2 \cos \omega t \sin \phi$$

$$\Rightarrow y = \sin \omega t (A_1 + A_2 \cos \phi) + A_2 \sin \phi \cos \omega t$$

(30) Coherent sources are those sources which emit light ~~at~~ in phase or at a constant phase difference.

These are very important to obtain interference. If the sources are non coherent, then the phase between them keeps on changing, which makes the interference ~~not~~ unsustained and the bright and dark fringes cannot be differentiated. The screen appears to be of uniform intensity.

Let

$$y_1 = A_1 \sin(\omega t)$$

$$y_2 = A_2 \sin(\omega t + \phi)$$

By superposition principle

$$y = y_1 + y_2$$

$$\Rightarrow y = A_1 \sin \omega t + A_2 (\sin \omega t \cos \phi + \cos \omega t \sin \phi)$$

$$\Rightarrow y = A_1 \sin \omega t + A_2 \sin \omega t \cos \phi + A_2 \cos \omega t \sin \phi$$

$$\Rightarrow y = \sin \omega t (A_1 + A_2 \cos \phi) + A_2 \sin \phi \cos \omega t$$

0902

Fictitious Roll No.
(To be entered by Board)

अपना अनुक्रमांक इस उत्तर-पुस्तिका

पर न लिखें

Please do not write your

Roll Number on this Answer-Book

अतिरिक्त उत्तर-पुस्तिका (ओं) की संख्या.....

Supplementary Answer-Book(s) No..... 3

30

Continued

$$\text{Let } A_1 + A_2 \cos \phi = R \cos \theta \quad \text{--- (1)}$$

$$A_2 \sin \phi = R \sin \theta \quad \text{--- (2)}$$

$$\therefore y = R \sin \omega t \cos \theta + R \cos \omega t \sin \theta$$

$$y = R \sin(\omega t + \theta)$$

Squaring (1) and (2) and adding

$$R^2 (\sin^2 \theta + \cos^2 \theta) = A_2^2 \sin^2 \phi + A_1^2 + A_2^2 \cos^2 \phi + 2 A_1 A_2 \cos \phi$$

$$\Rightarrow R^2 = A_1^2 + A_2^2 + 2 A_1 A_2 \cos \phi$$

$$R = \sqrt{A_1^2 + A_2^2 + 2 A_1 A_2 \cos \phi}$$

$$\begin{aligned}
 I_{\text{net}} &= kR^2 \\
 &= kA_1^2 + kA_2^2 + 2kA_1A_2 \cos \phi.
 \end{aligned}$$

$$\Rightarrow I_{\text{net}} = I_1 + I_2 + 2\sqrt{I_1 I_2} \cos \phi.$$

For maxima

$$\phi = 0, 2\pi, 4\pi, \dots$$

$$\phi = 2n\pi \quad n = 0, 1, 2, \dots$$

$$I_{\text{net}} = I_1 + I_2 + 2\sqrt{I_1 I_2}$$

Maxima fringe

$$\frac{x d}{D} = n\lambda \quad n = 0, 1, 2, \dots$$

($2n\pi$ corresponds to $n\lambda$)
as $2\pi = \lambda$.

$$\Rightarrow \boxed{x = \frac{n\lambda D}{d}}$$

Fringe width = $x_{n+1} - x_n$

$$\beta = (n+1) \frac{\lambda D}{d} - \frac{n\lambda D}{d} = \boxed{\frac{\lambda D}{d} = \beta}$$

For minima

$$\phi = \pi, 3\pi, 5\pi = \frac{(2n+1)\lambda}{2} \quad n = 0, 1, 2, \dots$$

$$\phi = (2n+1)\pi$$

$$I_{\text{net}} = I_1 + I_2 - 2\sqrt{I_1 I_2}$$

Minima fringe

$$\frac{x d}{D} = \frac{(2n+1)\lambda}{2}$$

$$\Rightarrow x = \frac{(2n+1)\lambda D}{2d}$$

$n\lambda$)

$$\text{Fringe width} = x_{n+1} - x_n$$

$$\beta = \frac{(2n+3)\lambda D}{2d} - \frac{(2n+1)\lambda D}{2d} = \frac{\lambda D}{d}$$

$$\boxed{\beta = \frac{\lambda D}{d}}$$

Thus, fringe of maximum intensity and minimum intensity are equal.

$$\beta = \frac{\lambda D}{d}$$

Acc. to Cauchy's formula.

$$\lambda \propto \frac{1}{\mu}$$

When immersed in water the fringe width (β') would decrease

$$\beta' = \frac{\beta}{\mu} = \frac{\lambda D}{\mu d}$$

